

PLNT2530 PLANT BIOTECHNOLOGY

MID-TERM EXAMINATION

11:30 am to 12:20 pm

Monday, February 26, 2018

Answer any combination of questions totalling to exactly 100 points. If you answer questions totalling more than 100 points, answers will be discarded at random until the total points equal 100. The questions total to 120 points. This exam is worth 20% of the course grade.

Hand in these question sheets along with your exam book. Question sheets will be shredded.

Ways to write a readable and concise answer:

- i. Just answer the question. Save time by specifically addressing what is asked. Don't give irrelevant background if it doesn't contribute to the question that was asked.
- ii. Avoid stream of consciousness. Plan your answer by organizing your key points, and then write a concise, coherent answer. Make your point once, clearly, rather than repeating the same thing several times with no new information.
- iii. Point form, diagrams, tables, bar graphs, figures are welcome. Often they get the point across more clearly than a long paragraph.
- iv. Your writing must be legible. If I can't read it, I can't give you any credit.

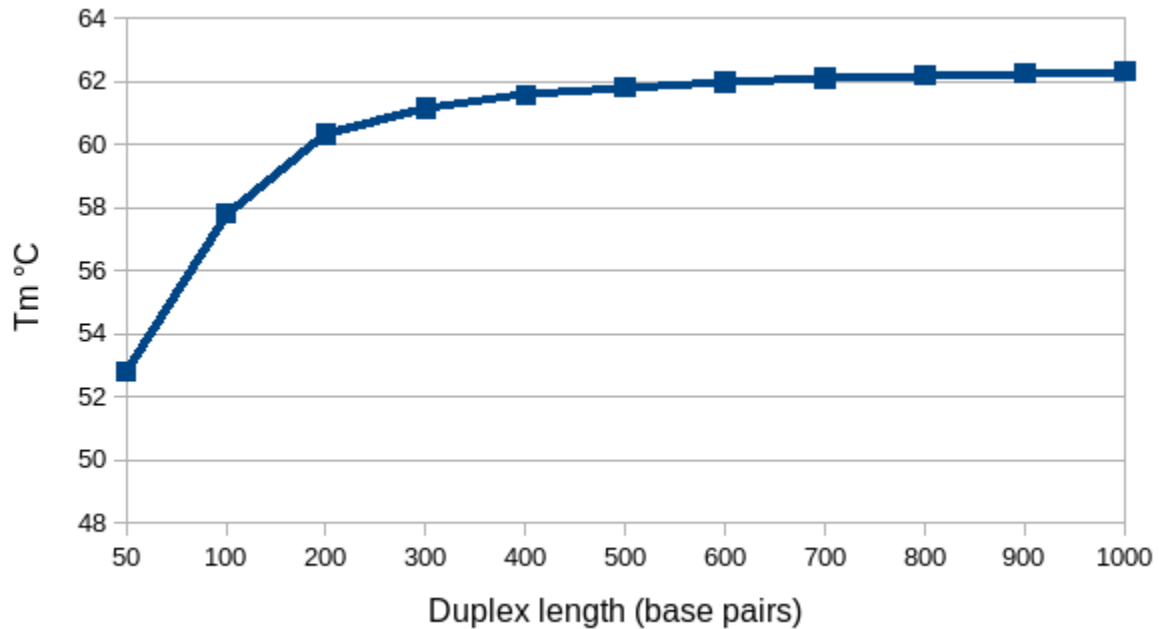
1. (15 points) The following table lists restriction enzymes and their cutting sites, indicated by the caret (^). For boxes labeled **a - e**, indicate what should be in the box.

Enzyme	Cutting site	Cohesive ends		Ligates with*
BamHI	a	5' -G 3' -CCTAG	GATCC - 3' G - 5'	Mbol
EcoRV	5' GAT^ATC3'	5' -GAT 3' -CTA	ATC - 3' TAG - 5'	HpaI
KpnI	5' GGTAC^C3'	5' -GGTAC 3' -C	C - 3' CATGG - 5'	b
Asp718	5' G^GTACC3'	5' -G 3' -CCATG	GTACC - 3' G - 5'	c
HpaI	5' GTT^AAC3'	5' -GTT 3' -CAA	AAC - 3' TTG - 5'	EcoRV
Mbol	5' ^GATC3'		d	e

N - wild card ie. any of A,G,C or T

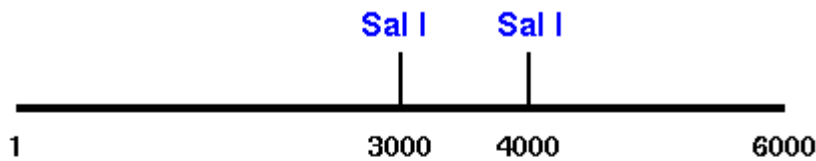
*With which other sites would the cohesive ends generated by this enzyme ligate? If none of the other sites are compatible, answer "NA"

2. (10 points) A plot of melting temperature T_m as a function of duplex length is shown for double-stranded DNAs of various sizes. What generalizations can you draw from the results?


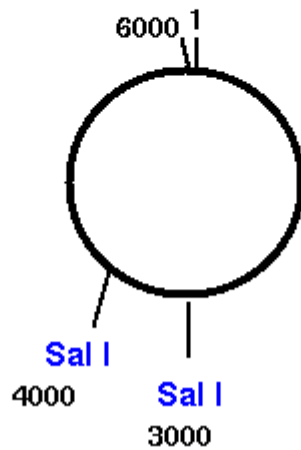


3. (10 points) Restriction sites for SalI are shown for two different DNA molecules, as indicated in a) and b). Reference coordinates are also indicated on the maps. Draw a diagram, similar to the one shown at right, of the expected bands seen for SalI digests of each of these molecules, if loaded side by side on a gel.

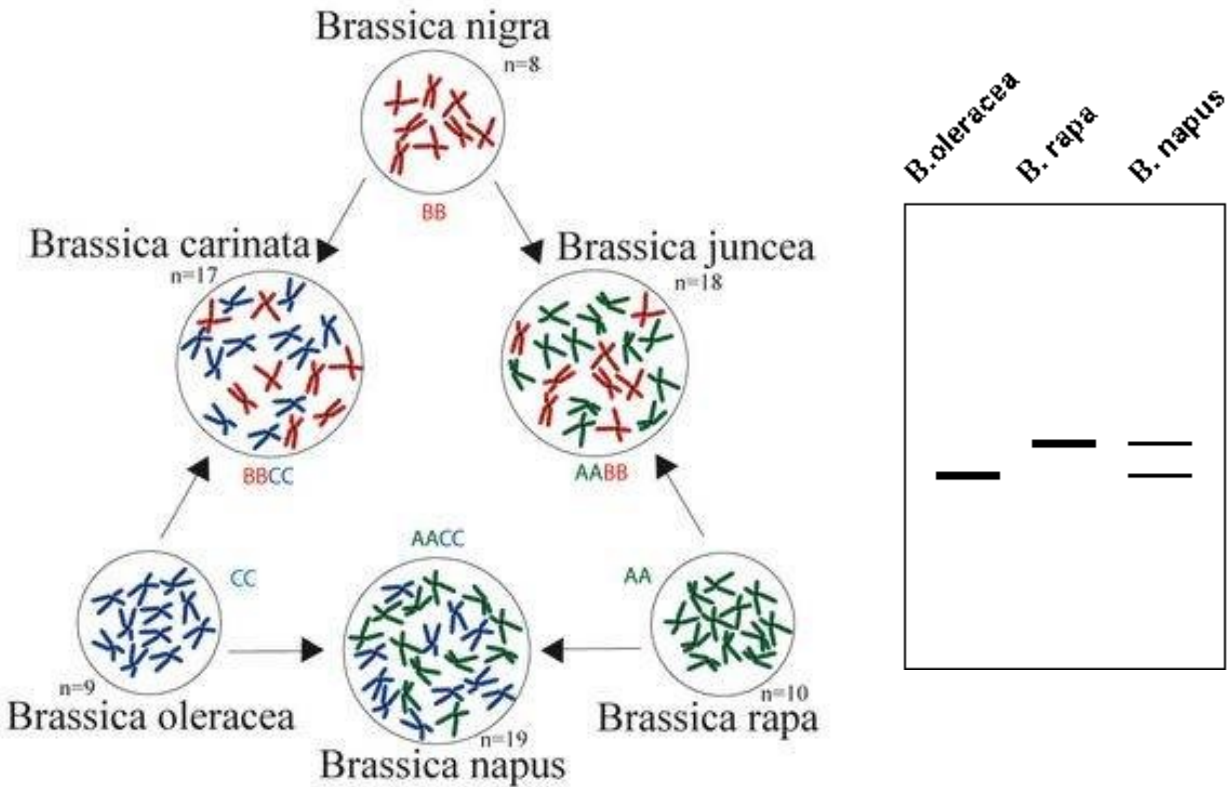
a)



b)



4. (10 points) As illustrated in the figure at left, *B. napus* is a hybrid derived from *B. rapa* and *B. oleracea*. The figure at right shows a Southern blot of DNA that has been cut with a restriction enzyme, from three *Brassica* species and probed with cloned sequence taken from a gene. You can assume that 1 µg of genomic DNA was added in each lane.



- a) How do you account for the fact that *B. rapa* and *B. oleracea* each shows one band, while *B. napus* shows two bands?
- b) In replicate experiments, Southern hybridization consistently shows more intense bands with *B. rapa* and *B. oleracea* DNA than with *B. napus*. Based on what we discussed in class, is there something about these genomes that would account for the different signal intensities? Explain your reasoning.

5. (10 points) Design a set of DNA hybridization probes for a protein that contains the following amino acid sequence:

Ile Met His Ser Trp Tyr

For reference, the standard Genetic Code is included on the last page of this exam. In total, how many unique oligonucleotides would you have to make to account for all possible 18-mers that could encode this polypeptide?

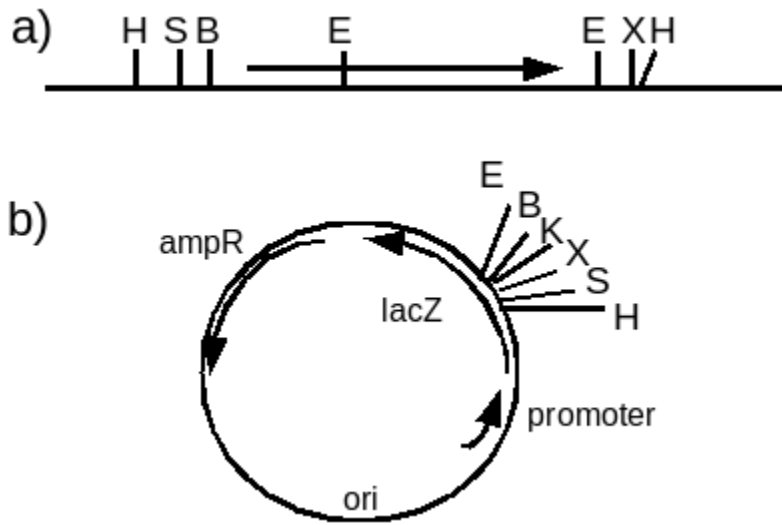
6. (10 points) In expression libraries, each clone expresses the protein encoded by a single cDNA insert. Why is it not possible to make expression libraries in BAC vectors carrying large fragments (eg. 100 kb) of plant genomic DNA as inserts? Give at least 2 reasons.

7. (15 points) A restriction map of a gene that you want to clone is shown in a). The direction of transcription of the gene is indicated by an arrow. Your goal is to use directional cloning to clone the transcribed sequence of the gene into the vector (b) in the sense orientation. In other words, your construct should have the insert in the correct orientation to produce the protein coded for by the gene, under the control of the lacZ promoter.

Describe a directional cloning strategy with the following information

- Which enzyme(s) would you use to cut the gene?
- Which enzyme(s) would you use to cut the vector?
- Draw a map of the final construct

There are several possible cloning strategies. Only describe one of those.



H = HindIII; S=SalI; B=BamHI; E=EcoRI; K=KpnI; X=XbaI

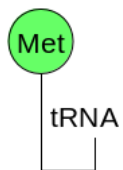
8. (15 points) When growing cells in callus culture, there are three categories of components that must be included in the media: essential elements, organic supplements, and a carbon source. Briefly define what each of these does and give an example of each.

Explain why we don't need to provide these things to mature plants growing in soil.

9. (5 points) Draw a simple diagram illustrating the posttranscriptional processing of pre-mRNA transcripts into mature mRNA. Also show the translation step, indicating the N-terminal and C-terminal ends of the polypeptide product. Show steps in the order in which they occur.

Genetic code

		Second base							
		U		C		A		G	
U	First base	UUU	Phe	UCU	Ser	UAU	Tyr	UGU	Cys
		UUC	Phe	UCC	Ser	UAC	Tyr	UGC	Cys
		UUA	Leu	UCA	Ser	UAA	STOP	UGA	STOP
		UUG	Leu	UCG	Ser	UAG	STOP	UGG	Trp
C	First base	CUU	Leu	CCU	Pro	CAU	His	CGU	Arg
		CUC	Leu	CCC	Pro	CAC	His	CGC	Arg
		CUA	Leu	CCA	Pro	CAA	Gln	CGA	Arg
		CUG	Leu	CCG	Pro	CAG	Gln	CGG	Arg
A	First base	AUU	Ile	ACU	Thr	AAU	Asn	AGU	Ser
		AUC	Ile	ACC	Thr	AAC	Asn	AGC	Ser
		AUA	Ile	ACA	Thr	AAA	Lys	AGA	Arg
		AUG	Met	ACG	Thr	AAG	Lys	AGG	Arg
G	First base	GUU	Val	GCU	Ala	GAU	Asp	GGU	Gly
		GUC	Val	GCC	Ala	GAC	Asp	GGC	Gly
		GUA	Val	GCA	Ala	GAA	Glu	GGA	Gly
		GUG	Val	GCG	Ala	GAG	Glu	GGG	Gly



tRNA

UAC

5' AUG codon

mRNA